



أسئلة كتاب التمارين

الألوف

أكتب العدد الذي يمثله كل نموذج:

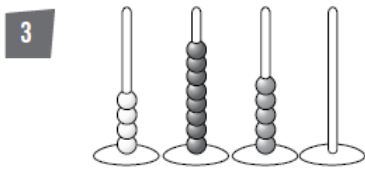


1165

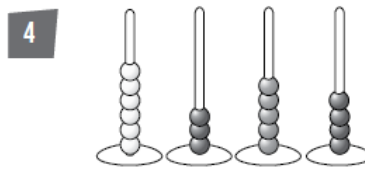


3256

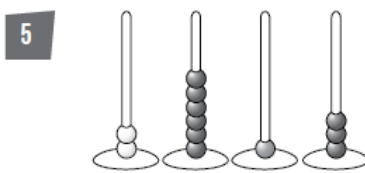
أكتب العدد الذي يمثله كل معداد:



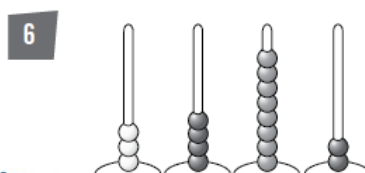
4850



6354



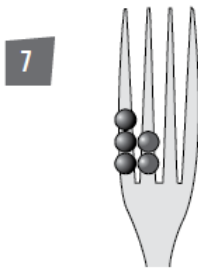
2613



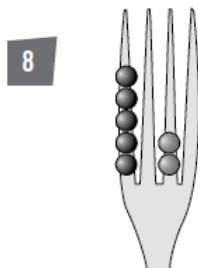
3482

منهاجي

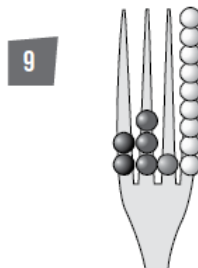
أكتب العدد الذي يمثله كل شوكة:



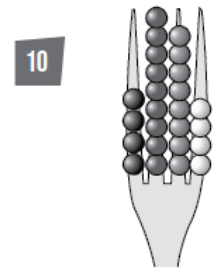
3200



5020



2319



4984