




أسئلة كتاب التمارين


الكسر كجزء من مجموعة

أَكْتُبِ الْكَسْرَ الدَّالَّ عَلَى الشَّيْءِ الْمُلَوَّنِ، ثُمَّ أَقْرَأْهُ:

1  $\frac{3}{6}$


2  $\frac{3}{5}$


3  $\frac{3}{4}$


4  $\frac{7}{8}$

أَلَوِّنُ لِأُمْتَلِّ الْكَسْرَ الْمُعْطَى:

5 $\frac{5}{6}$ 

6 $\frac{3}{4}$ 

7 $\frac{2}{3}$ 

8 $\frac{5}{7}$ 

9 $\frac{3}{8}$ 

10 $\frac{2}{5}$ 