
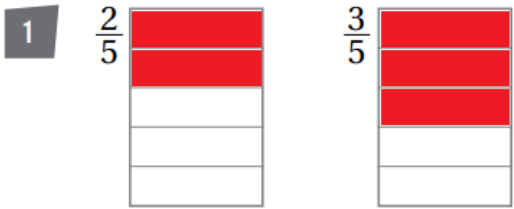


أسئلة كتاب التمارين

مقارنة الكسور

ألَوْنُ لِتَمَثِيلِ كُلِّ كَسْرٍ، ثُمَّ أَقَارِنُ مُسْتَعْمِلًا < أو = أو >:

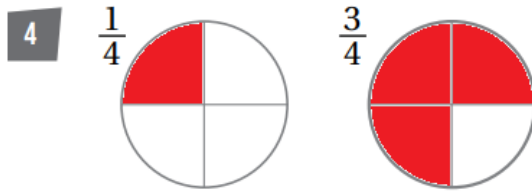
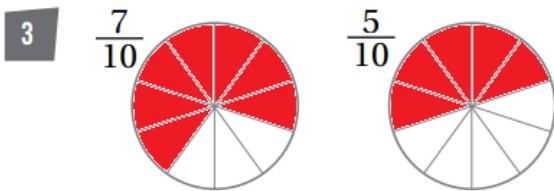


$$\frac{2}{5} < \frac{3}{5}$$

منهاجي



$$\frac{2}{3} > \frac{1}{3}$$



$$\frac{7}{10} > \frac{5}{10}$$

منهاجي



$$\frac{1}{4} < \frac{3}{4}$$

اَكْتُبِ الكَسْرَ الَّذِي يُمَثِّلُ الْجُزْءَ الْمُظَلَّلَ، ثُمَّ أَقَارِنُ مُسْتَعْمِلًا < أو = أو >:



$$\frac{4}{5} > \frac{3}{5}$$

منهاجي



$$\frac{5}{8} < \frac{7}{8}$$

أَسْتَعْمِلُ نَمَازِجَ الْكُسُورِ؛ لِأَقَارِنَ مُسْتَعْمِلًا < أَوْ = أَوْ >:

1								
$\frac{1}{3}$			$\frac{1}{3}$			$\frac{1}{3}$		
$\frac{1}{6}$		$\frac{1}{6}$		$\frac{1}{6}$		$\frac{1}{6}$		$\frac{1}{6}$
$\frac{1}{9}$	$\frac{1}{9}$	$\frac{1}{9}$	$\frac{1}{9}$	$\frac{1}{9}$	$\frac{1}{9}$	$\frac{1}{9}$	$\frac{1}{9}$	$\frac{1}{9}$

7 $\frac{1}{6} < \frac{1}{3}$

8 $\frac{2}{6} = \frac{1}{3}$

9 $\frac{2}{9} > \frac{1}{6}$

10 $\frac{2}{3} = \frac{6}{9}$

11 $\frac{1}{6} > \frac{1}{9}$

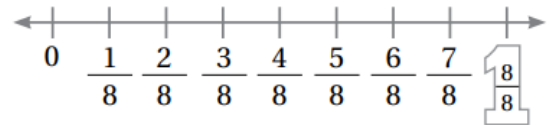
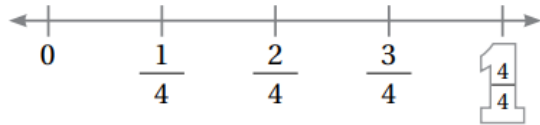
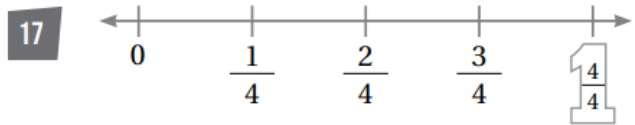
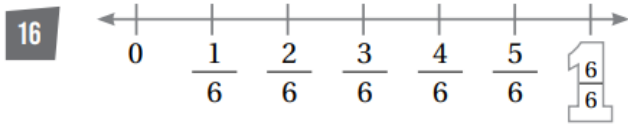
12 $\frac{1}{6} < \frac{1}{3}$

13 $\frac{5}{9} < \frac{2}{3}$

14 $\frac{1}{9} < \frac{5}{6}$

15 $\frac{5}{6} < \frac{8}{9}$

أَسْتَعْمِلُ خَطَّ الْأَعْدَادِ؛ لِأَقَارِنَ مُسْتَعْمِلًا < أَوْ = أَوْ >:



$\frac{4}{6} < \frac{3}{4}$



$\frac{3}{4} = \frac{6}{8}$